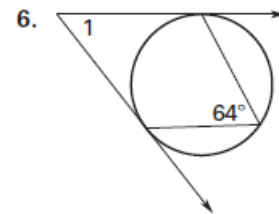
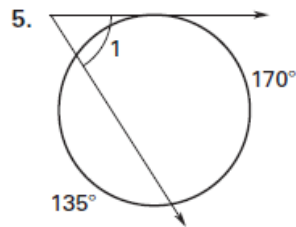
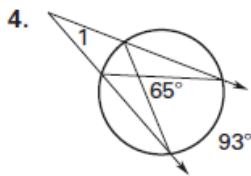
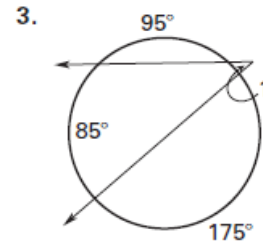
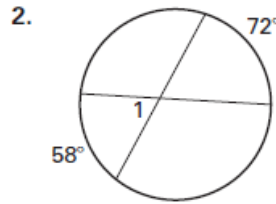
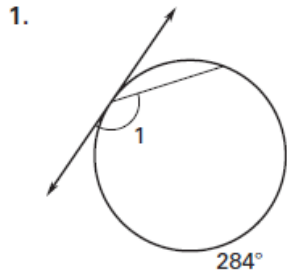


**Practice C**

For use with pages 621–627

Find the measure of  $\angle 1$ .



**Practice C**

For use with pages 629–635

Find the value of  $x$ . Round decimal answers to the nearest tenth.

