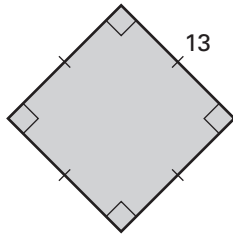


Practice B

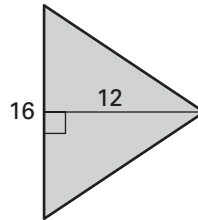
For use with pages 372–380

Find the area of the polygon.

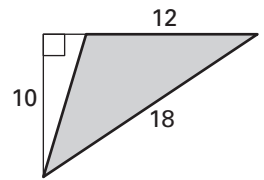
1.



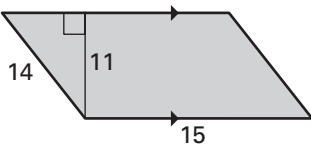
2.



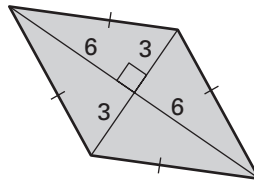
3.



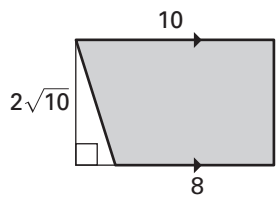
4.



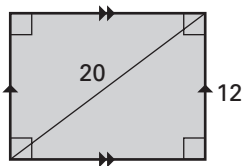
5.



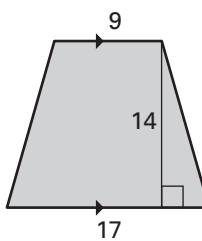
6.



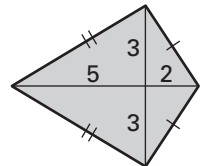
7.



8.

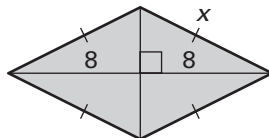


9.

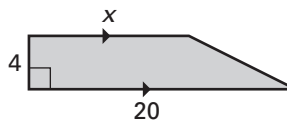


The quadrilateral has an area of 64 square units. Find the value of x .

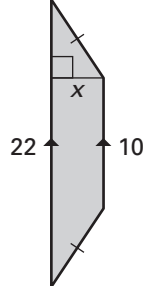
10.



11.

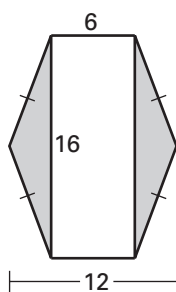


12.

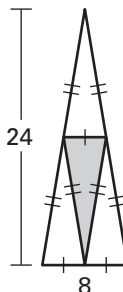


Find the areas of the shaded and unshaded regions.

13.



14.



15.

