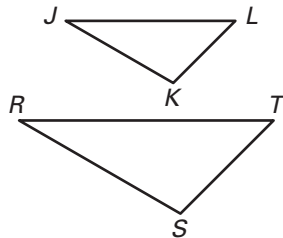


Practice B

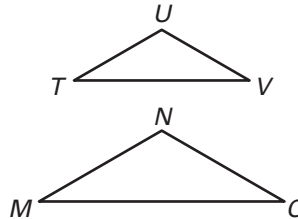
For use with pages 473–479

List all pairs of congruent angles and write the statement of proportionality for the figures.

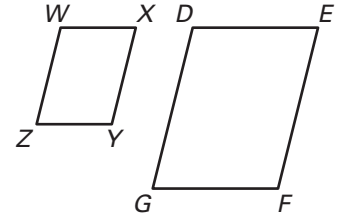
1. $\triangle JKL \sim \triangle RST$



2. $\triangle TUV \sim \triangle MNO$

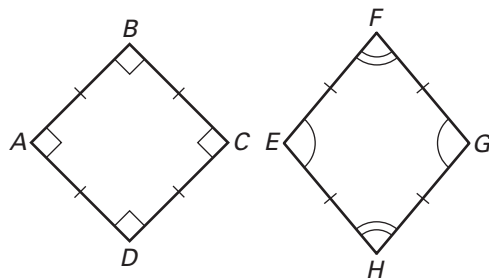


3. $\square WXYZ \sim \square DEFG$

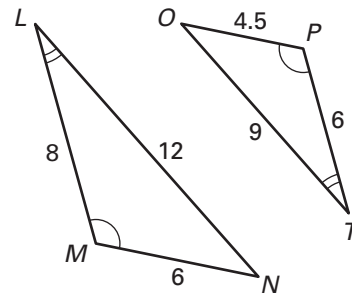


Decide whether the polygons are similar. If so, write a similarity statement.

4.

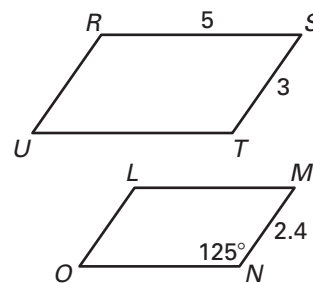


5.



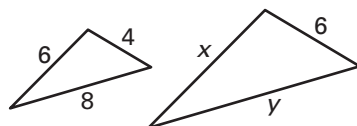
In the diagram at the right, $\square RSTU \sim \square LMNO$.

6. Find the scale factor of $\square RSTU$ to $\square LMNO$.
7. Find the scale factor of $\square LMNO$ to $\square RSTU$.
8. Find the length of \overline{NO} .
9. Find the measure of $\angle U$.
10. Find the perimeter of $\square LMNO$.
11. Find the ratio of the perimeter of $\square RSTU$ to the perimeter of $\square LMNO$.

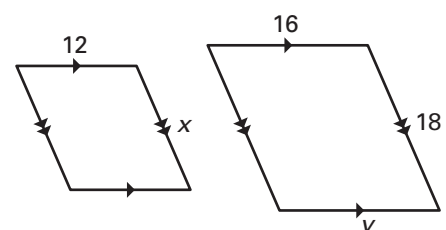


The two polygons are similar. Find the values of x and y .

12.



13.



14. The ratio of one side of $\triangle ABC$ to the corresponding side of similar $\triangle DEF$ is 3:5. The perimeter of $\triangle DEF$ is 48 inches. What is the perimeter of $\triangle ABC$?